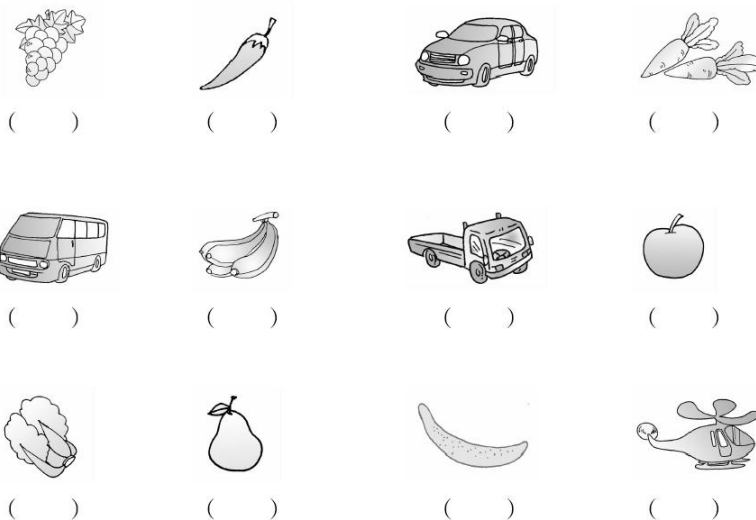




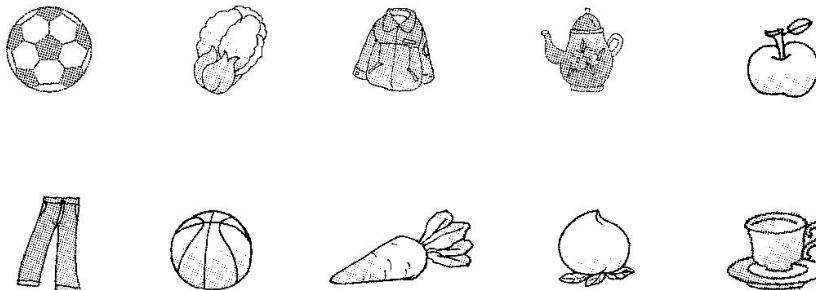
## 第六单元达标测试卷

一、画一画，连一连。(1题12分，2题5分，3题8分，共25分)

1. 是水果的画“√”，是蔬菜的画“△”，是玩具的画“□”。

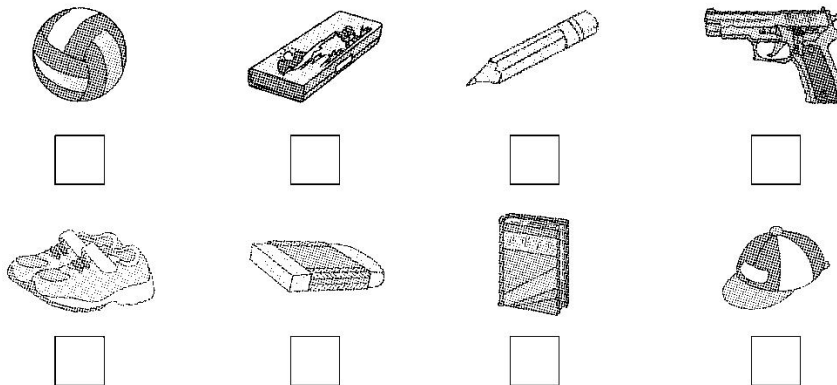


2. 找朋友。(把同类的连起来)



3. 小明去商店里买一些学习用品，应该买什么呢？(在它们下面的


里画“√”)






二、圈一圈。(1题8分，2题9分，共17分)

1. 把每行中不是同类的圈起来。




2. 把能在水里生活的动物圈起来。



三、分一分。(每题8分，共16分)

1. 把下列物品的序号填在适当的横线上。



交通工具： \_\_\_\_\_

动物： \_\_\_\_\_

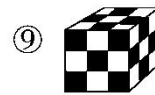
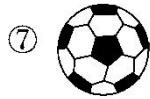
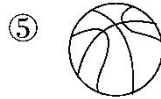
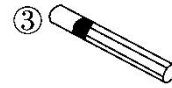
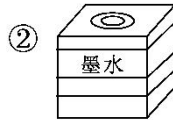
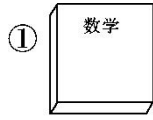




水果： \_\_\_\_\_

学习用品： \_\_\_\_\_

2. 分一分，把序号填在横线上。



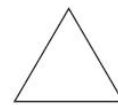
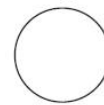


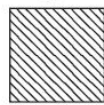
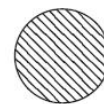

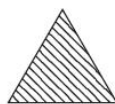

长方体： \_\_\_\_\_

正方体： \_\_\_\_\_

圆柱： \_\_\_\_\_

球： \_\_\_\_\_

四、想一想，填一填。(12分)

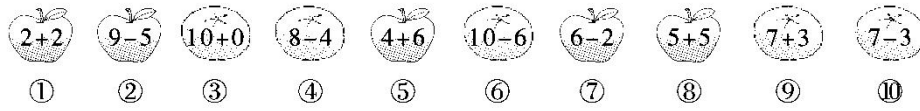


分法一： (        ) (        ) (        )

分法二： (        ) (        ) (        )

五、(变式题)算一算，分一分。(填序号)(18分)






苹果

橘子

分法一：



加法算式

减法算式

分法二：






得数是4

得数是10

分法三：



六、(变式题)给下列物品添上一个同类的。(12分)

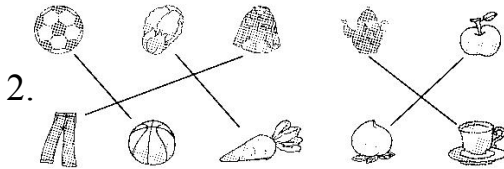





## 答案

一、1. (√)(Δ)(□)(Δ)(□)(√)

(□)(√)(Δ)(√)(Δ)(□)



3.



三、1. 交通工具：①⑦⑫

动物：②⑧⑪

水果：③⑤⑥

学习用品：④⑨⑩

2. 长方体：①⑧

正方体：②⑨

圆柱：③④⑥

球：⑤⑦





四、分法一：(①③⑦) (②④⑤)

(⑥⑧⑨)

分法二：(①⑤⑥) (②⑦⑨)

(③④⑧)

五、分法一：苹果：①②⑤⑦⑧

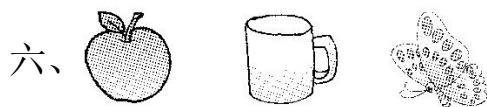
橘子：③④⑥⑨⑩

分法二：加法算式：①③⑤⑧⑨

减法算式：②④⑥⑦⑩

分法三：得数是 4：①②④⑥⑦⑩

得数是 10：③⑤⑧⑨



[点拨]答案不唯一，只要画出同类的物品即可。

