



第七、八单元过关检测卷


一、填一填。(每空1分, 共27分)

1. 19 里面有()个十和()个一, 2 个十是()。


2. 个位上是 8, 十位上是 1 的数是()。

3. 大于 12 小于 16 的数有()。


4. 看图写数。



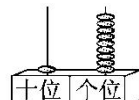
()




()



()



()

5. 在  中填上合适的数。

$$5 + \text{apple} = 14$$

$$\text{apple} + 4 = 11$$

$$\text{apple} + 9 = 12$$

$$2 + \text{apple} = 15$$

$$7 + \text{apple} = 13$$

$$8 + \text{apple} = 16$$

6. 在 \bigcirc 里填上“>”“<”或“=”。

$$6 + 9 \bigcirc 16$$


$$14 \bigcirc 3 + 8$$

$$8 + 9 \bigcirc 15$$

$$12 + 7 \bigcirc 16$$

$$11 \bigcirc 3 + 13$$

$$16 - 2 \bigcirc 7 + 6$$

7. 在  里填上“+”或“-”。

$$9 \text{ flower } 6 = 15$$

$$6 \text{ flower } 7 = 13$$

$$16 \text{ flower } 6 = 10$$

$$11 \text{ flower } 3 = 14$$


$$18 \text{ flower } 6 = 12$$

$$0 \text{ flower } 15 = 15$$






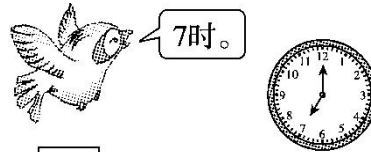
二、写出钟面上的时刻。(4分)



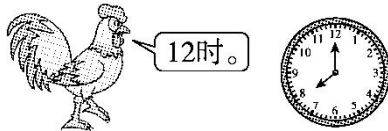
三、小动物们说得对吗？对的画“√”，错的画“×”并改正过来。(每题2分，共8分)




1.



2.



3.



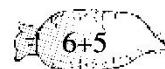
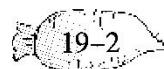
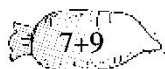
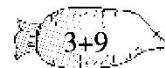
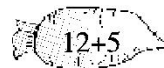
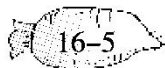
4.

四、算一算，写一写，连一连。(每题8分，共24分)

1. $8+5=$ $\left\{ \begin{array}{l} 7 + 6 \\ \square + \square \\ \square + \square \end{array} \right.$

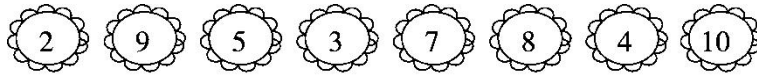
$5+6=$ $\left\{ \begin{array}{l} 8 + 3 \\ \square + \square \\ \square + \square \end{array} \right.$

2. 把得数相同的连一连。





3. 下面哪两个数加起来是 12? 写一写算式。




$$\square \bigcirc \square = \square$$

$$\square \bigcirc \square = \square$$


$$\square \bigcirc \square = \square$$

$$\square \bigcirc \square = \square$$


五、根据时间画出时针和分针。(9分)



4时



9时半



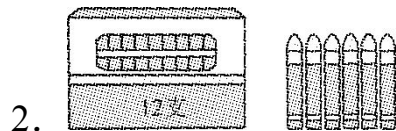
10时

六、看图列式。(每题 3 分, 共 12 分)



1.

$$\square \bigcirc \square = \square$$




2.

$$\square \bigcirc \square = \square$$

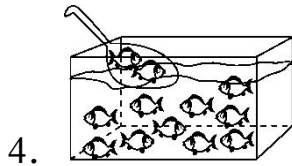
$$\square \bigcirc \square = \square$$

3. 一共有 16 朵。



$$\square \bigcirc \square = \square$$



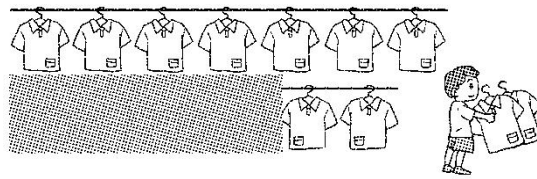


$$\square \bigcirc \square = \square$$

七、解决问题。(2题6分，其余每题5分，共16分)

1. 还剩多少件?

原来有15件衣服。



$$\square \bigcirc \square = \square$$



我跳了6下。

2. 小乐



我跳了8下。

小林



我跳了9下。

小红

(1) 小红和小乐一共跳了多少下?

$$\square \bigcirc \square = \square$$

(2) 小红和小林一共跳了多少下?

$$\square \bigcirc \square = \square$$

3. 买哪两箱合适? 圈一圈。

有16个小朋友，每人1盒。



4盒包装的牛奶



8盒包装的牛奶



12盒包装的牛奶





答案

一、1. 1 9 20 2. 18

3. 13, 14, 15

4. 12 16 14 19

5. 9 7 3 13 6 8

6. < > > > < >

7. + + - + - +

二、8: 00 4: 30 8: 30 6: 00

三、1. × 改正: 4 时半

2. √

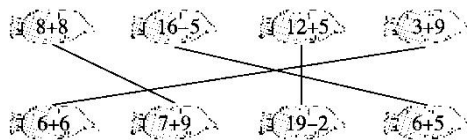
3. × 改正: 8 时

4. √

四、1. $9+4$ $10+3$

$7+4$ $10+1$ (答案不唯一)

2.



3. $9+3=12$ $5+7=12$ $8+4=12$ $10+2=12$

五、



4时



9时半



10时

六、1. $8+5=13$





2. $12+6=18$ $6+12=18$

3. $16-6=10$ 4. $12-2=10$

七、1. $15-2=13$

2. (1) $6+9=15$ (2) $8+9=17$

3. $12+4=16$ 圈第1箱和第3箱。

