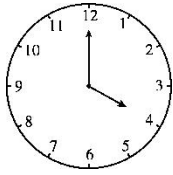




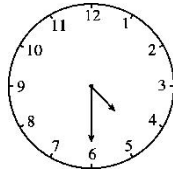
## 第二单元达标测试卷

一、用两种方法表示下面钟表上的时刻。(8分)



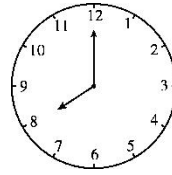
\_\_\_\_\_

\_\_\_\_\_



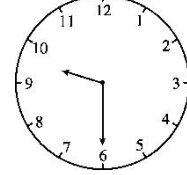
\_\_\_\_\_

\_\_\_\_\_



\_\_\_\_\_

\_\_\_\_\_

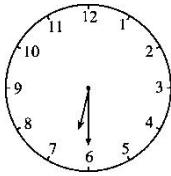



\_\_\_\_\_

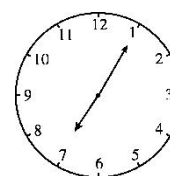
\_\_\_\_\_

二、选一选。(每题2分，共6分)

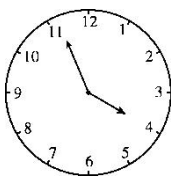
1. 在7时的钟表后面画“√”。

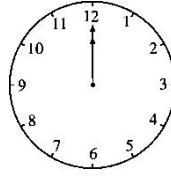







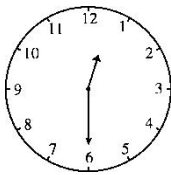

2. 在大约11时的钟表后面画“√”。

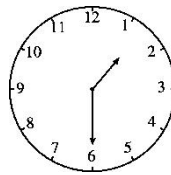


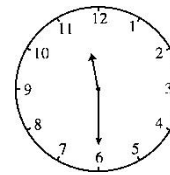





3. 在12:30的钟表后面画“√”。

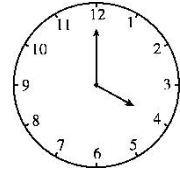
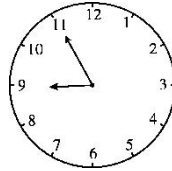
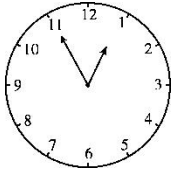







三、认一认，连一连。(12分)





4: 00

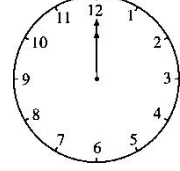

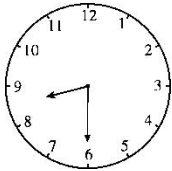
12 时刚过

快 9 时了

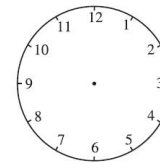
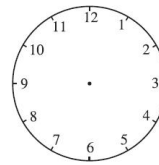
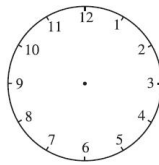
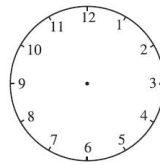
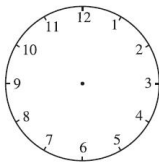
8: 30

大约 1 时

10 时



四、根据钟表下面的时间，画出相应的分针和时针。(10 分)



2 时 30 分


大约 3 时

12 时

快 7 时了

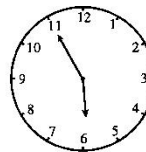
6 时

五、比一比，看谁先到家。(12 分)




我是\_\_\_\_\_到家的。

小明



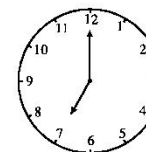
我是大约\_\_\_\_\_到家的。

晶晶



我是\_\_\_\_\_到家的。

小红



我是\_\_\_\_\_到家的。

小英

( )最先到家，( )最后到家。





六、小动物们读得对的画“√”，错的画“×”，并改正。(每题 2 分，共 8 分)

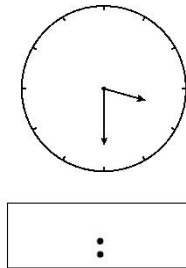
1. ( )改正:\_\_\_\_\_

2. ( )改正:\_\_\_\_\_

3. ( )改正:\_\_\_\_\_


4. ( )改正:\_\_\_\_\_

七、明明家的钟表对面有一面镜子，镜子里面的钟表如下图，请问实际钟表上的时刻是什么时刻？(8 分)




### 变式应用

八、(变式题)下面都是从中午到晚上的时间，先认一认，在横线上写出时间，再按先后顺序排一排，在□里写上序号。(8 分)




\_\_\_\_\_

□




\_\_\_\_\_

□



\_\_\_\_\_

□

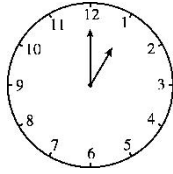


\_\_\_\_\_

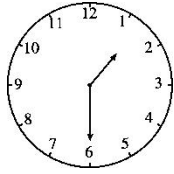
□

九、(变式题)按要求写出时间。(8 分)






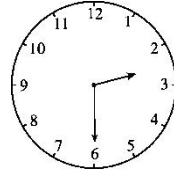
2小时前是  
( )



半小时后是  
( )





1小时后是  
( )





1小时前是  
( )

十、(变式题)写出钟表所显示的时间，再把它和明明活动的内  
容连起来。(8分)





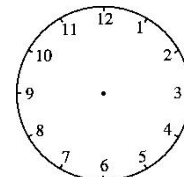
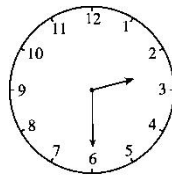
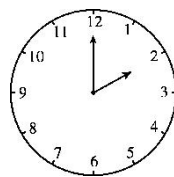
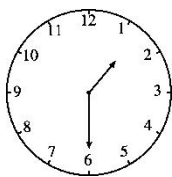






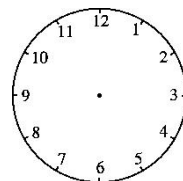
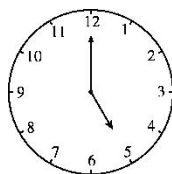
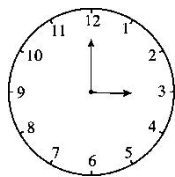
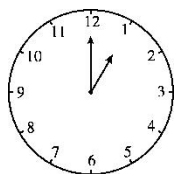
十一、(变式题)按规律画出最后一个钟面上的时针和分针。(每题3分，  
共12分)

1.






2.








3.



4.





## 答案

一、4时 4时30分 8时 9时30分

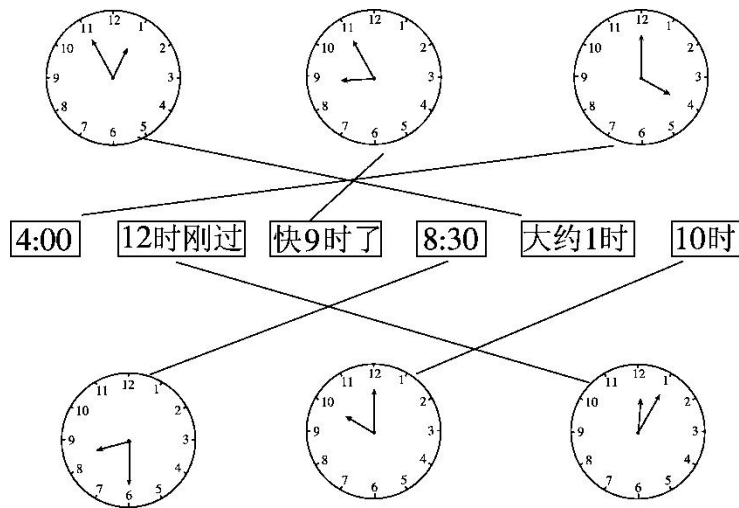
4:00 4:30 8:00 9:30

二、

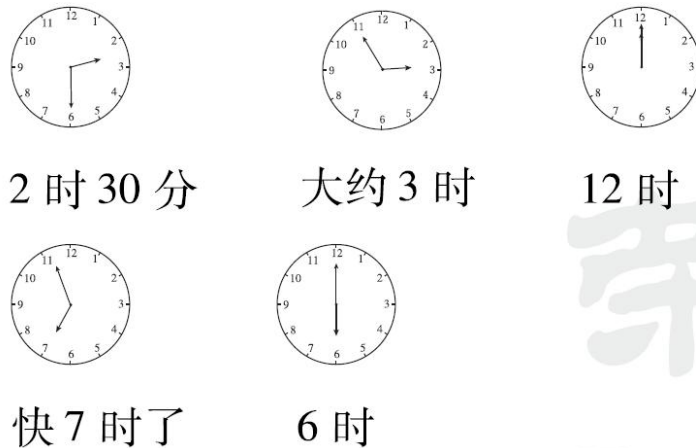
1.    2.

3.

三、



四、



[点拨]第2个钟表和第4个钟表的画法不唯一。





五、5时 6时 5时30分 7时 小明 小英

六、1.× 6时 2.× 2时30分

3. × 大约12时 (或12时刚过)


4. × 快2时了 (或大约2时)

七、8:30 [点拨]可以用12:00减去镜子中看到的时刻，就是实际的时刻。 $12:00 - 3:30 = 8:30$

八、6:30, 3) 3:00, 2) 12时刚过, 1) 8:00, 4)

九、11:00 2:00 4:00 1:30

十、



十一、

1.

2.

3.

4.

