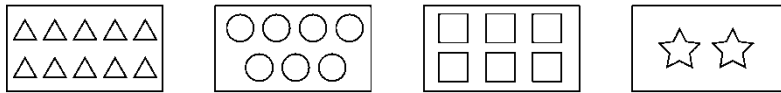
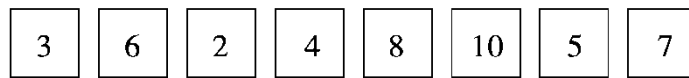
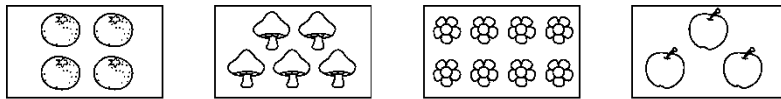




## 第一单元过关检测卷

一、连一连，圈一圈，画一画，写一写。(1题16分，2题6分，3题9分，共31分)

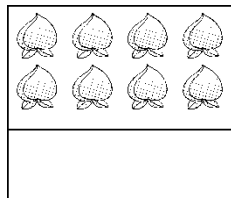
1. 连一连。



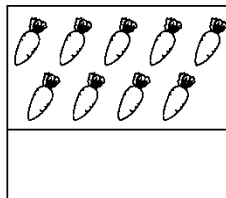
2. 看数圈一圈。




3. 数一数，先画“○”，再写一写。



( )



( )



( )





二、填一填。(1题7分，4题10分，其余每题8分，共33分)

1. 按规律填数。

4		6	7		
9		7			


2. 在  $\bigcirc$  里填上 “>”“<”或 “=”。

$7 \bigcirc 5$        $4 \bigcirc 9$        $2 \bigcirc 5$        $10 \bigcirc 9$   
 $3 \bigcirc 0$        $2 \bigcirc 2$        $4 \bigcirc 3$        $8 \bigcirc 6$

3. 在里  $\square$  填上合适的数。

$\square < 6$        $8 < \square$        $7 > \square$        $\square < 4$   
 $2 > \square$        $\square = 0$        $7 < \square$        $9 > \square$

4. 排一排。




三、比一比。(1题6分，2题3分，共9分)

1. 在少的后面画 “√”。







2. 在最多的下面画“√”。



(        )



(        )



(        )

四、画一画，连一连。(1, 2, 3 题每题 3 分, 4, 5 题每题 9 分, 共 27 分)

1. 画△与☆同样多。

☆☆☆☆



2. 画○比□多。

□□□□

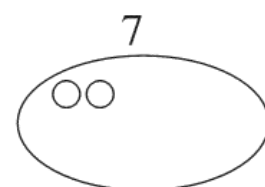
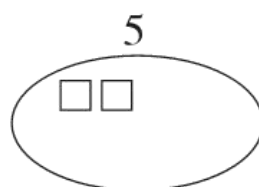
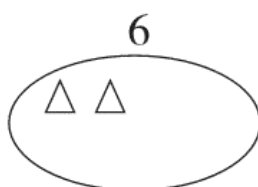


3. 画□比△少。

△△△△△



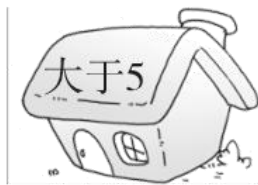


4. 看数继续画。





5. 连一连。

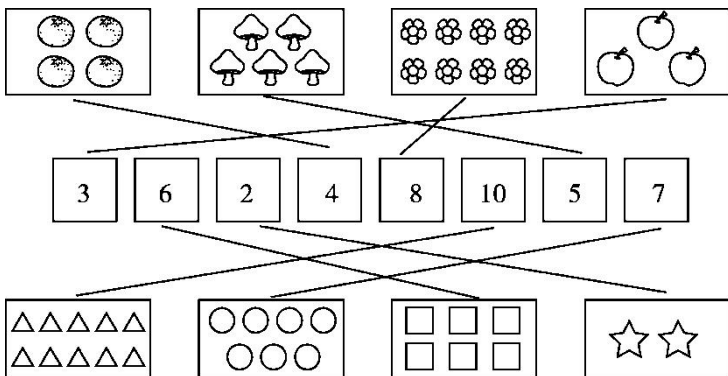




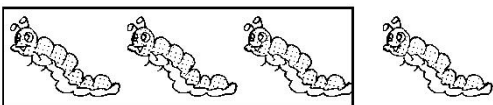
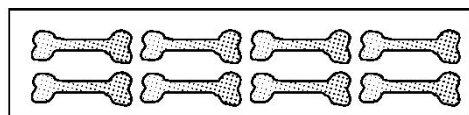
## 答案

一、

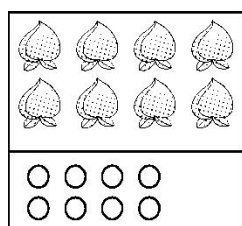
1.



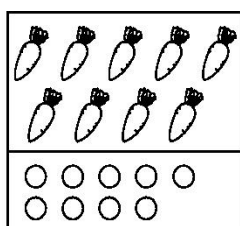
2.



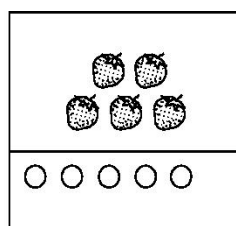
3.



( 8 )





( 9 )



( 5 )

二、1.





2. > < < > > = > >

3. 5 9 6 3 1 0 8 0(除第6个空外，其他空答案不唯一)

4. (10)>(9)>(6)>(3)>(0)

三、1. (1)( ) (√) (2)(√) ( )

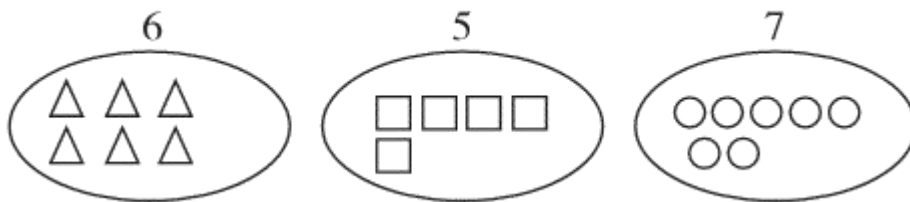
2. (√) ( ) ( )

四、1. △△△△

2. ○○○○○○(答案不唯一)

3. □□□(答案不唯一)

4.



5.

