



第八单元测试卷

一、算一算。

$$\begin{array}{c} 10-9= \\ 9-7= \\ 3+6= \\ 4+3= \end{array}$$

$$\begin{array}{c} 7-0= \\ 5+4= \\ 8-8= \\ 6-2= \end{array}$$

$$\begin{array}{c} 0+10= \\ 8-4= \\ 6+2= \\ 7+3= \end{array}$$

$$\begin{array}{c} 10-4= \\ 9-5= \\ 10-7= \\ 7-3= \end{array}$$

二、想一想, 填一填。

1. 在○里填上“+”或“-”。

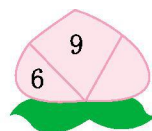
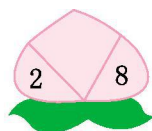
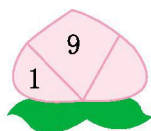
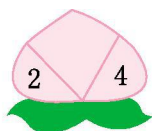
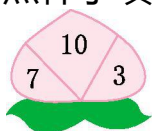
$5 \bigcirc 2 = 7$

$10 \bigcirc 6 = 4$

$8 \bigcirc 0 = 8$

$9 \bigcirc 2 = 7$

2. 照样子填数。



3. 在()里填上合适的数。

$6 - () = 4$

$7 + () = 10$

$6 = 9 - ()$

$10 = 4 + ()$

$4 + () = 9$

$9 - () = 3$

三、直接写出得数。

$2+1+7=$

$6+4-5=$

$8-4+3=$

$2+2+6=$

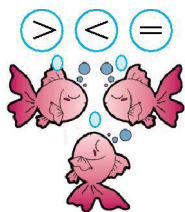
$7-2-3=$

$9-7-0=$

$4+5-3=$

$8-6+7=$

四、比一比。



$4+2 \bigcirc 7$

$3+7 \bigcirc 10$

$9-6 \bigcirc 4$

$6+1 \bigcirc 4+4$

$7-0 \bigcirc 0+7$

$7-5 \bigcirc 8-6$

$4+3 \bigcirc 10-2$

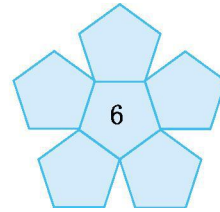
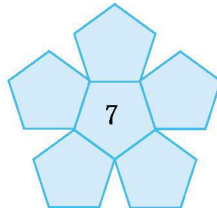
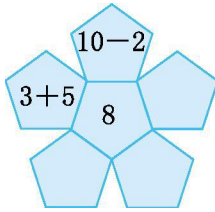
$10-3-3 \bigcirc 3$

$2+7-3 \bigcirc 5$





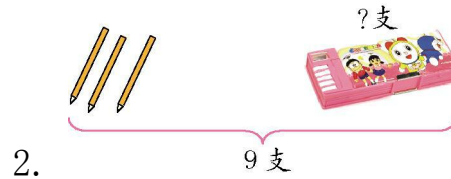
五、照样子, 看得数写算式。




六、看图列式计算。




$$\square \bigcirc \square = \square$$




$$\square \bigcirc \square = \square$$



3. $\square \bigcirc \square \bigcirc \square = \square$



4. $\square \bigcirc \square \bigcirc \square = \square$




$$\square \bigcirc \square = \square \quad \square \bigcirc \square = \square$$

$$\square \bigcirc \square = \square \quad \square \bigcirc \square = \square$$

七、数学与生活。

1. 草地上有 3 只熊猫在吃竹子, 有 2 只熊猫在玩球。一共有多少只熊猫?



$$\square \bigcirc \square = \square$$


2. 贝贝练习射击, 有 5 个气球, 他射破了 1 个, 还剩几个气球?





$$\square \bigcirc \square = \square$$

3. 小华家的羊圈里有 10 只小羊,第一次跑出了 3 只,第二次跑出了 1 只。羊圈里还剩几只小羊?



$$\square \bigcirc \square \bigcirc \square = \square$$

4. 小红的右边有 3 人,左边有 4 人,这一排一共有多少人?



小红





第八单元测试卷答案

一、1 2 9 7 7 9 0 4 10 4 8 10

6 4 3 4

二、1. + - +或- -

2. 6 8 10 3

3. 2 3 3 6 5 6

三、10 5 7 10 2 2 6 9

四、< = < < = = < > >

五、(答案不唯一)4+4 9-1 2+6 4+3 2+5

9-2 8-1 6+1 5+1 2+4 3+3 9-3

8-2

六、1. $5+2=7$ 2. $9-3=6$ 3. $4+2+3=9$

4. $4+4-3=5$

5. $6+2=8$ $2+6=8$ $8-2=6$ $8-6=2$

七、1. $3+2=5$

2. $5-1=4$

3. $10-3-1=6$

4. $3+4+1=8$

