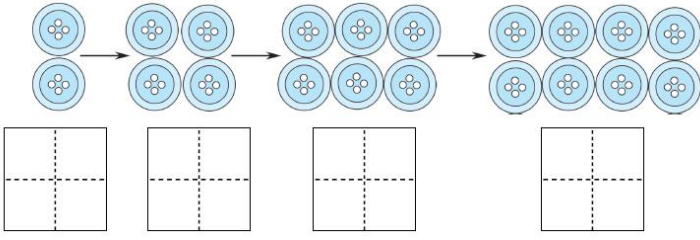
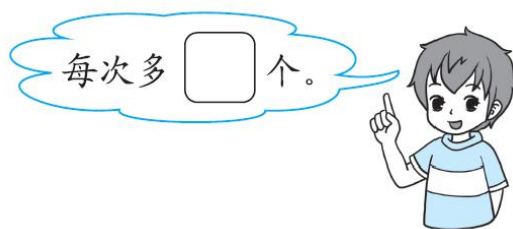




周测培优卷 4

一、我会填，也会画。(每空 1 分，共 23 分)

1. 



2. 填一填。

$$5+3-6 = \square$$

∨

$$10-7-3 = \square$$

∨



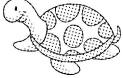
$$2+3+4 = \square$$

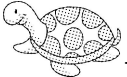

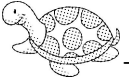
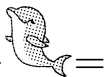
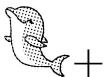

∨

3. 画一画，填一填。

○○○○ _____ $4 + \square = 10$

_____ □□□□□ $\square + 5 = 8$

4.  = 2  = 3  = 5

 -  =  -  =  +  =

5. 小动物们在数数。





依次加2。

1 3

依次减2。

8

二、计算挑战。(共 62 分)

1. 看谁算得又快又对! (每题 1 分, 共 16 分)

$10-4=$	$8+2=$	$6-3=$	$7+2-8=$
$4+2=$	$5-3=$	$7-4=$	$6-6+4=$
$9-2=$	$10-1=$	$9+1=$	$10-5-5=$
$7+3=$	$0+7=$	$4-2=$	$3+2+4=$

2. 我要找妈妈。(每空 1 分, 共 8 分)

4 $\xrightarrow{-3}$ $\xrightarrow{+3}$ $\xrightarrow{+3}$ $\xrightarrow{-7}$


6 $\xrightarrow{-0}$ $\xrightarrow{+1}$ $\xrightarrow{-3}$ $\xrightarrow{+2}$

3. 数字“开屏”。(每题 9 分, 共 18 分)

(1)

(2)

4. 勤劳的小蜜蜂。(每题 2 分, 共 12 分)





$9-3+2 \text{ () } 7$

$1+6-4 \text{ () } 4$

$9-7+5 \text{ () } 5$

$4+6-2 \text{ () } 10$

$5+4-3 \text{ () } 3$

$6+4-3 \text{ () } 7$

5. 填上合适的数。(每题 1 分, 共 8 分)

$3 + \text{ () } = 9$

$\text{ () } + 2 = 9$

$2 + \text{ () } = 8$

$5 + \text{ () } = 3 + 6$

$6 + \text{ () } = 10$

$5 + \text{ () } = 10$

$5 + \text{ () } = 8$


$4 + \text{ () } = 10 - 2$

三、爱上生活中的数学。(第 1 题 7 分, 第 2 题 8 分, 共 15 分)


1. 一共有几支铅笔?

$\text{ () } \bigcirc \text{ () } = \text{ () }$

qiān bǐ hé lǐ zhuāng yǒu zhī qiān bǐ
铅笔盒里装有 7 支铅笔。



2. 一共有 9 个蘑菇, 大树后面有几个?



$\text{ () } \bigcirc \text{ () } \bigcirc \text{ () } = \text{ () }$





答案

一、1.2 4 6 8 2

$$5+3-6= \boxed{2}$$

$$\boxed{8}$$

$$10-7-3= \boxed{0}$$

$$\boxed{3}$$

$$2+3+4= \boxed{9}$$

2. $\boxed{5}$

3. ○○○○○○ 6

□□□ 3

4. 2 3 5

5. 5 7

6. 4 2

二、1.6 10 3 1

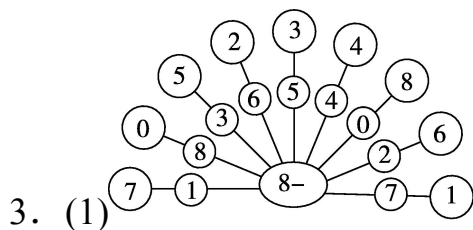
6 2 3 4

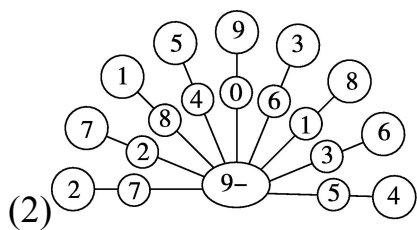
7 9 10 0

10 7 2 9

2. 1 4 7 0

6 7 4 6





4. $>$ $<$ $>$

$<$ $>$ $=$

5. 6 7 6 4 4 5 3 4

三、 $1.7+3=10$

2. $9-2-2=5$

