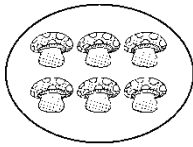


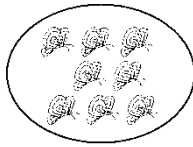


第一单元过关检测卷

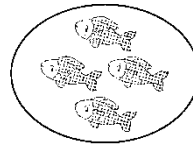
一、数一数，把对应的数圈起来。(9分)



5 6 7

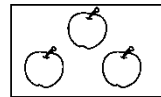
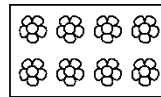

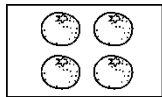


7 8 9



3 4 5

二、连一连。(16分)



③

④

⑤

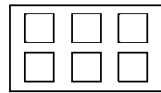
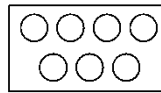
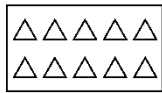
⑧

②


⑩

⑦

⑥



三、把同样多的连起来。(8分)



四、画一画。(每题12分，共24分)

1. 数一数，照样子画一画。

○○○○○			

2. 比一比，画一画。

(1)画△与☆同样多。





☆ ☆ ☆ ☆

(2)画○比□多1个。

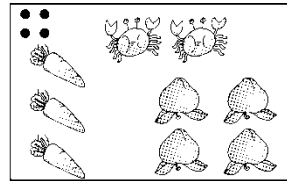
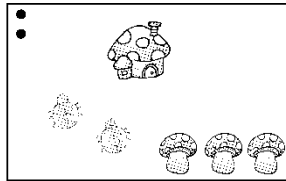
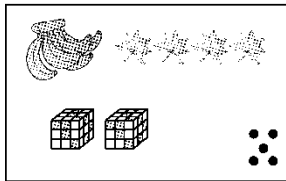

□ □ □ □ □

(3)画□比△少2个。

△ △ △ △ △ △

五、圈一圈。(每题12分，共24分)

1. 照样子，圈一圈。



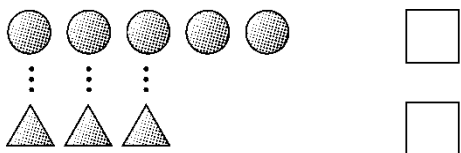
2. 看数圈一圈。



六、比一比。(每题3分，共9分)

1. 在少的后面画“√”。

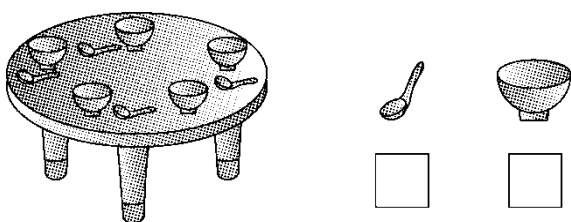




2. 在多的后面画“√”。

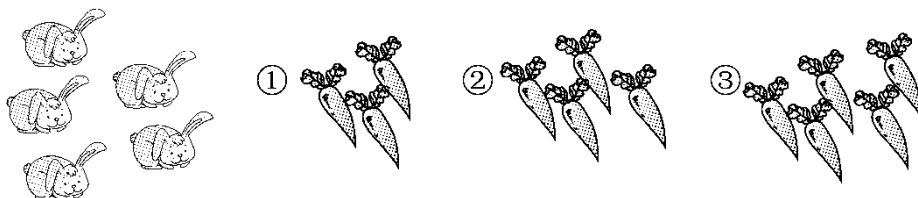


3. 在数量多的物体下面画“○”。



七、解决问题。(每题 5 分，共 10 分)

1. 让每只小兔都能吃到一个萝卜。你认为挑哪一堆比较合适？把它圈起来。



一只动物住一间房子，还有()间房子是空的。

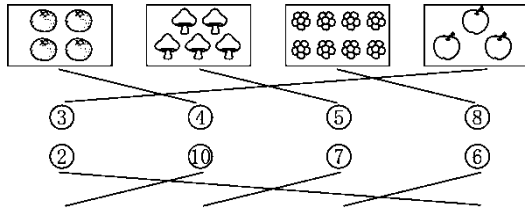




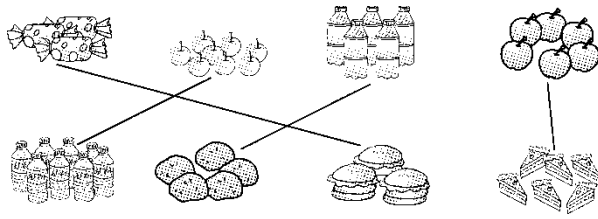
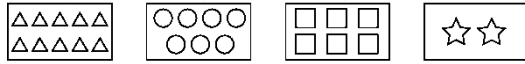


答案

一、⑥⑧④



二、



三、

四、1. ○○ ○○○ ○○○○
 ○○ ○○○ ○○○○○

2. (1)△△△△ (2)○○○○○○ (3)□□□□

五、略

六、1. □√ 2. □√ 3. □○

七、1. 圈③中的萝卜 2. 2

