





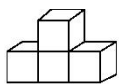




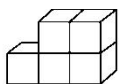
(2)  比  多( )个。

(3) 从左数， 是第( )个，从右数， 是第( )个。

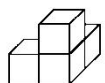
2. 数一数，每组图形有多少个小正方体？



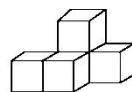
( )个



( )个








( )个



( )个

3. 机器人。



  
  
 有 yǒu ( ) 个 gè,  
 有 yǒu ( ) 个 gè,  
有 yǒu ( ) 个 gè,  
有 yǒu ( ) 个 gè.

三、圈一圈。(每题 3 分，共 12 分)

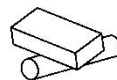
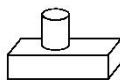
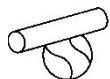
1. 把最难搭的圈起来。



2. 把滚得最快的圈起来。



3. 把能站稳的那一组圈起来。



4. 摆 ，用到了哪些图形？请圈出来。





四、选一选。(每题3分，共12分)

1. 下面是圆柱的是( )。



①

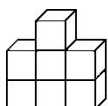


②

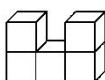


③

2. 正方体个数最多的是( )。



①



②

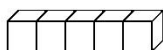


③

3. 由4个正方体拼成的图形是( )。




①



②



③

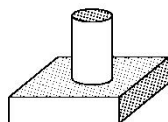
4.  至少要再放( )个正方体才能拼成一个大正方体。

①3

②4

③5

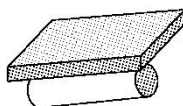
五、在不稳定的图形下面画“√”。(12分)



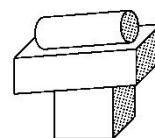
( )



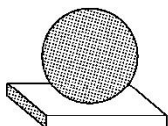
( )



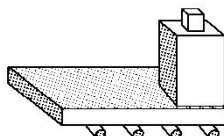
( )



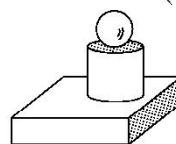
( )



( )

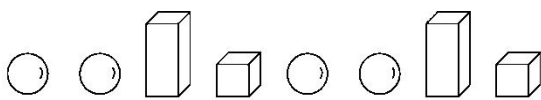





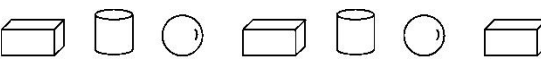


( )



( )

六、接着摆什么图形? 请圈一圈。(8分)

1.  \_\_\_\_\_ (    )

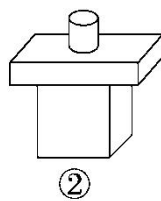
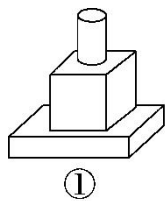
2.  \_\_\_\_\_ (    )

七、先放一个长方体，再在长方体上面放一个正方体，最后在正方体





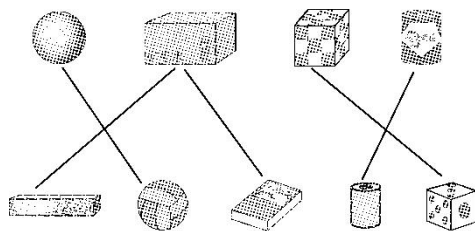
上面放一个圆柱。正确的搭法是( )。(填序号)(9分)



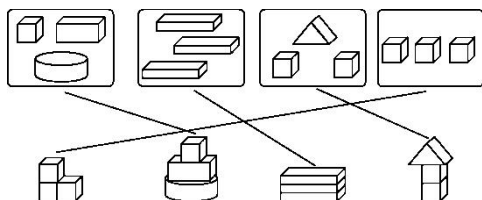


## 答案

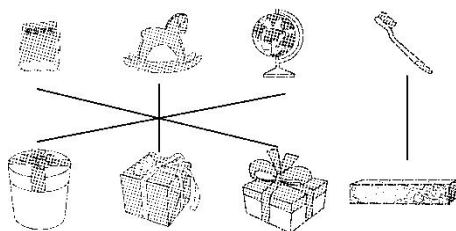
一、1.



2.





3.



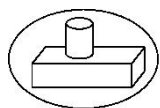
二、1. (1)2 1 4 2 (2)2 (3)5 5

2. 4 5 4 5

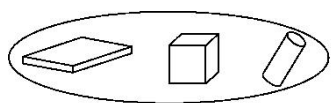
3. 5 5 3 1

三、1.  2. 

3.



4.





四、1. ② 2. ① 3. ③ 4. ②





五、( ) (√) (√) ( )

( ) (√) ( )

六、1.  2. 

七、①

