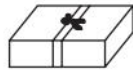
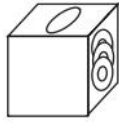




第六单元过关检测卷

一、连一连。(8分)

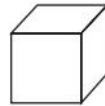
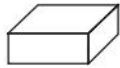


长方体

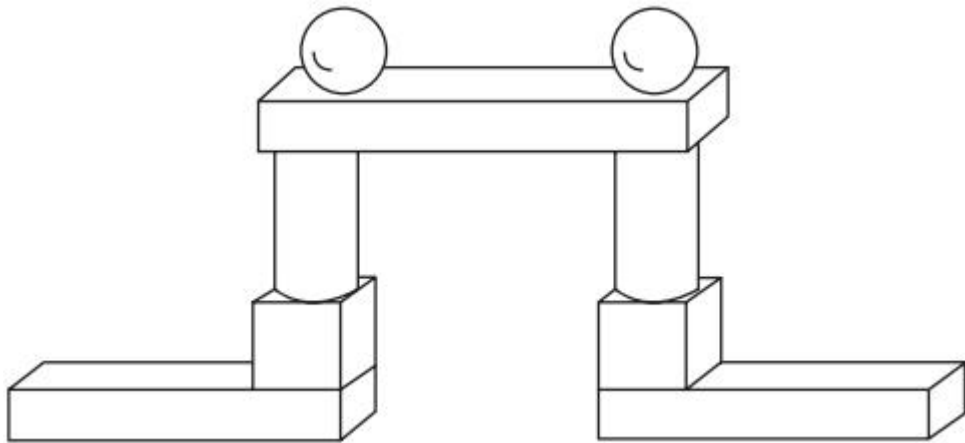
正方体

球

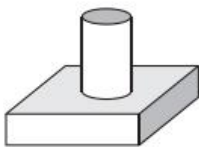
圆柱



二、按要求涂色。(长方体涂红色，正方体涂绿色，圆柱涂蓝色，球涂黄色)(9分)



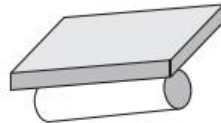
三、在不稳定的图形下面画“√”。(12分)



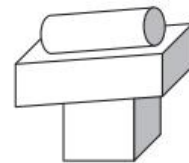
()



()

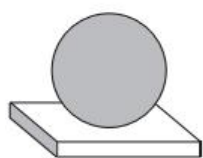


()

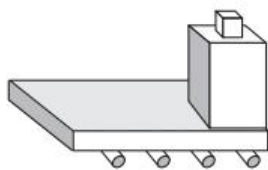


()

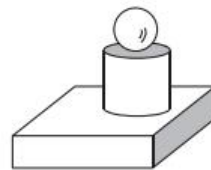




()




()



()

四、机器人。(12分)



有()个，



有()个，

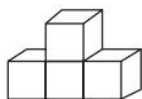


有()个，

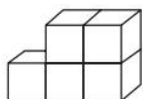


有()个。

五、数一数，每幅图中有多少个小正方体？(12分)



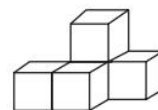
()个



()个



()个

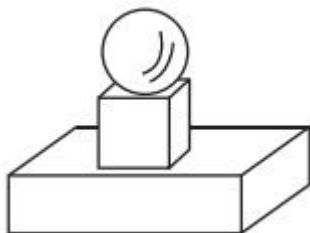



()个





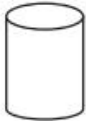



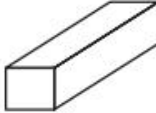







六、照下图摆一摆，填一填。(每空 2 分，共 14 分)

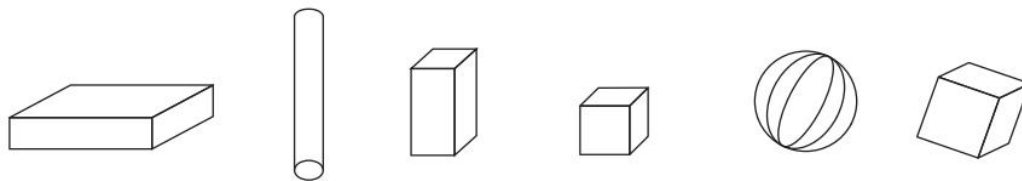


1. 先摆一个(), 再摆一个()。最后摆一个()。
2. 最上面是(), 最下面是()。
3.  在()的上面, 在()的下面。

七、把不一样的图形用“\”画去。(每题 3 分，共 9 分)

1.    
2.    
3.    

八、填一填，圈一圈，涂一涂。(3 题 6 分，其余每题 4 分，共 14 分)



1. 从左边数，圆柱是第()个，球是第()个。
2. 正方体有()个，长方体和正方体都有()个面。
3. 把右边的 5 个图形圈起来，把左边第 3 个图形涂上红色。






九、接着摆什么? 圈出正确的答案。(每题 5 分, 共 10 分)

1.        _____

(  )

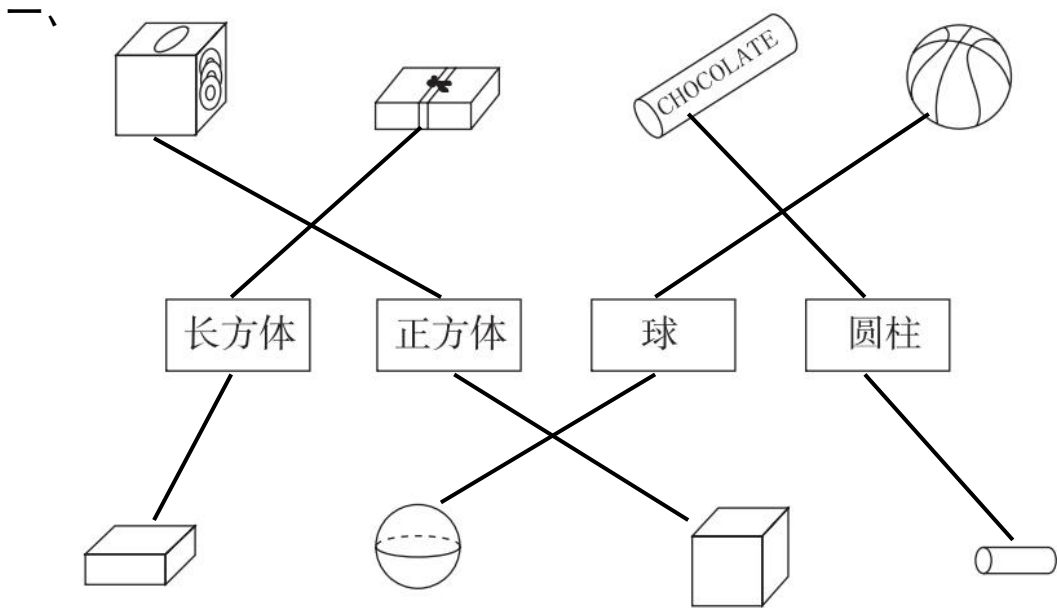
2.         _____

(   )



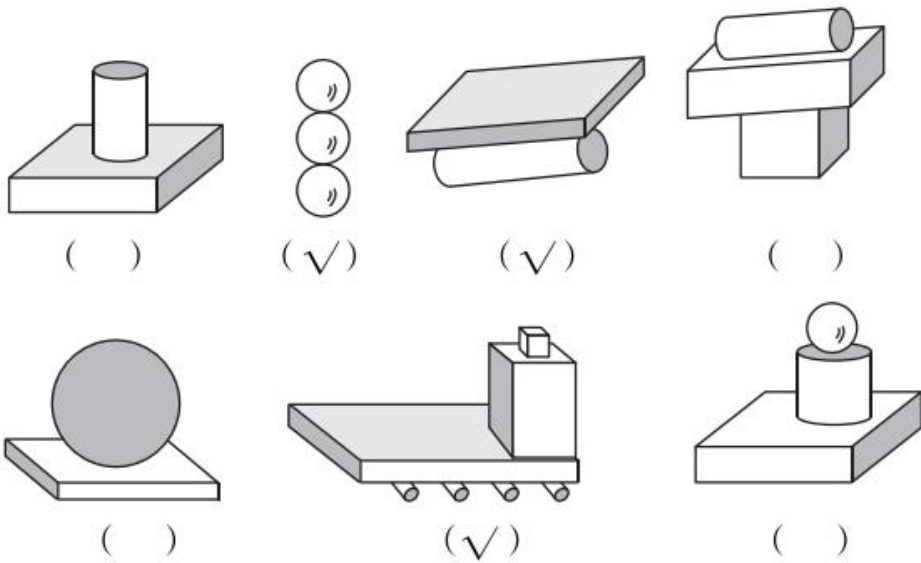


答案



二、略。

三、



四、5 5 3 1

五、4 5 4 5

六、1. 长方体 正方体 球

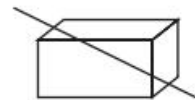
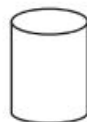
2. 球 长方体

3. 长方体 球

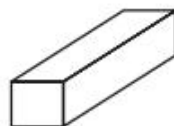
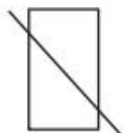





七、1.



2.



3.



八、1. 2 5

2. 2 6

3. 略。

九、1. 圈第一个

2. 圈第一个

